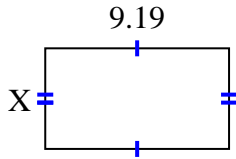


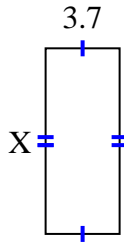


Find the value of X for each figure. Each figure is in centimeters (cm). Not to scale.

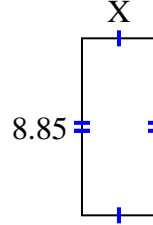
1) area = 46.2257 cm^2



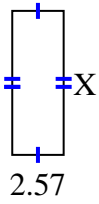
2) area = 34.336 cm^2



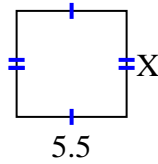
3) area = 32.745 cm^2



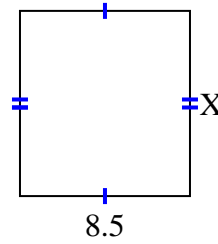
4) area = 18.504 cm^2



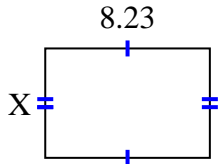
5) area = 29.15 cm^2



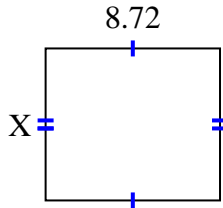
6) area = 78.71 cm^2



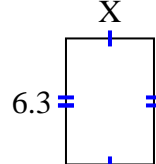
7) area = 45.0181 cm^2



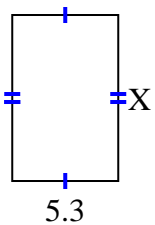
8) area = 66.272 cm^2



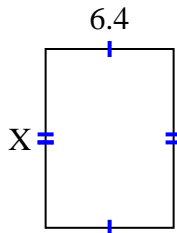
9) area = 27.72 cm^2



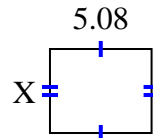
10) area = 43.99 cm^2



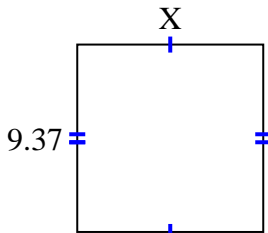
11) area = 57.216 cm^2



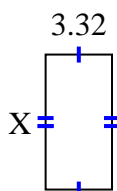
12) area = 21.336 cm^2



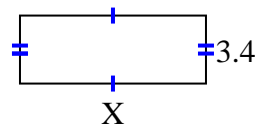
13) area = 87.141 cm^2



14) area = 22.41 cm^2



15) area = 31.62 cm^2



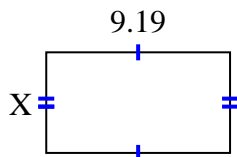
Answers

1. _____
2. _____
3. _____
4. _____
5. _____
6. _____
7. _____
8. _____
9. _____
10. _____
11. _____
12. _____
13. _____
14. _____
15. _____

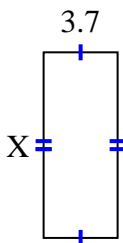


Find the value of X for each figure. Each figure is in centimeters (cm). Not to scale.

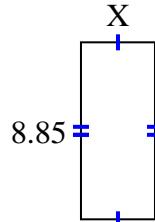
1) area = 46.2257 cm^2



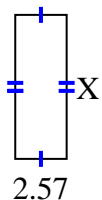
2) area = 34.336 cm^2



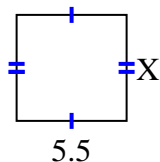
3) area = 32.745 cm^2



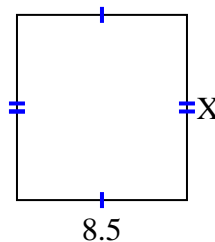
4) area = 18.504 cm^2



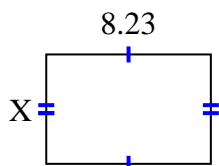
5) area = 29.15 cm^2



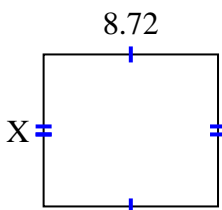
6) area = 78.71 cm^2



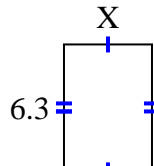
7) area = 45.0181 cm^2



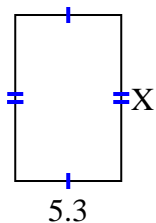
8) area = 66.272 cm^2



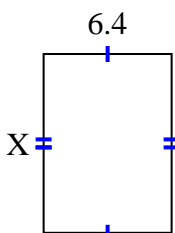
9) area = 27.72 cm^2



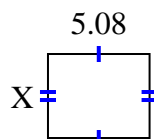
10) area = 43.99 cm^2



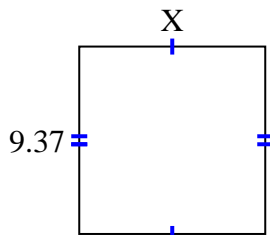
11) area = 57.216 cm^2



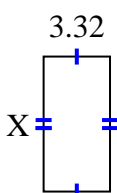
12) area = 21.336 cm^2



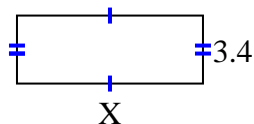
13) area = 87.141 cm^2



14) area = 22.41 cm^2



15) area = 31.62 cm^2



Answers

1. 5.03

2. 9.28

3. 3.7

4. 7.2

5. 5.3

6. 9.26

7. 5.47

8. 7.6

9. 4.4

10. 8.3

11. 8.94

12. 4.2

13. 9.3

14. 6.75

15. 9.3